

Range Part 2

What is the range of the given set of numbers?

1. 57, 31, 69, 40, 45

- 29
- 38
- 26
- 40

2. 25, 11, 34, 20, 17

- 17
- 14
- 23
- 20

3. 12, 18, 13, 15, 16

- 6
- 5
- 4
- 3

4. 26, 22, 24, 29, 21

- 8
- 5
- 7
- 3

5. 41, 45, 46, 43, 47

- 6
- 5
- 4
- 7

6. 98, 99, 94, 90, 93

- 6
- 9
- 8
- 5

7. 55, 53, 57, 51, 52

- 4
- 6
- 5
- 7

8. 20, 29, 24, 32, 30

- 10
- 8
- 12
- 6

9. 10, 14, 23, 21, 22

- 13
- 12
- 9
- 10

10. 54, 68, 57, 72, 70

- 14
- 15
- 16
- 18

Following are the number of glasses of water people drink in a day. Find the range of the number of glasses of water.

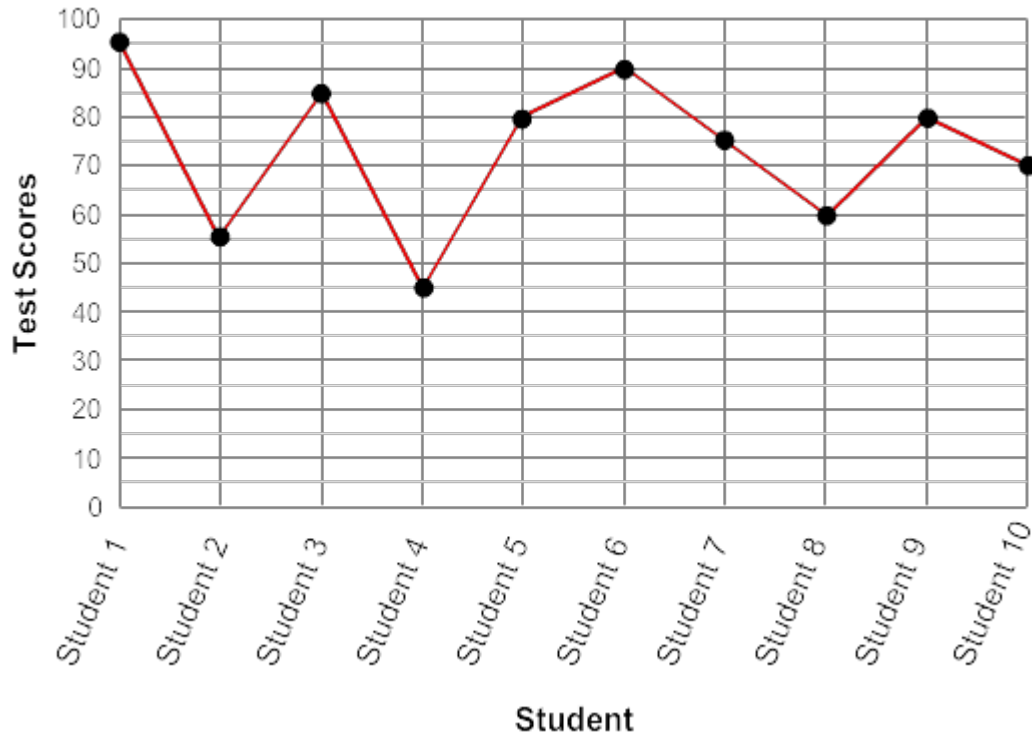
11.

Name	Number of Glasses
Dave	
Brian	
Joe	
Chris	
Jack	
Richard	

- 5
- 6
- 4
- 2

Look at the given graph representing the test scores for a group of 10 students. Find the range of the test scores.

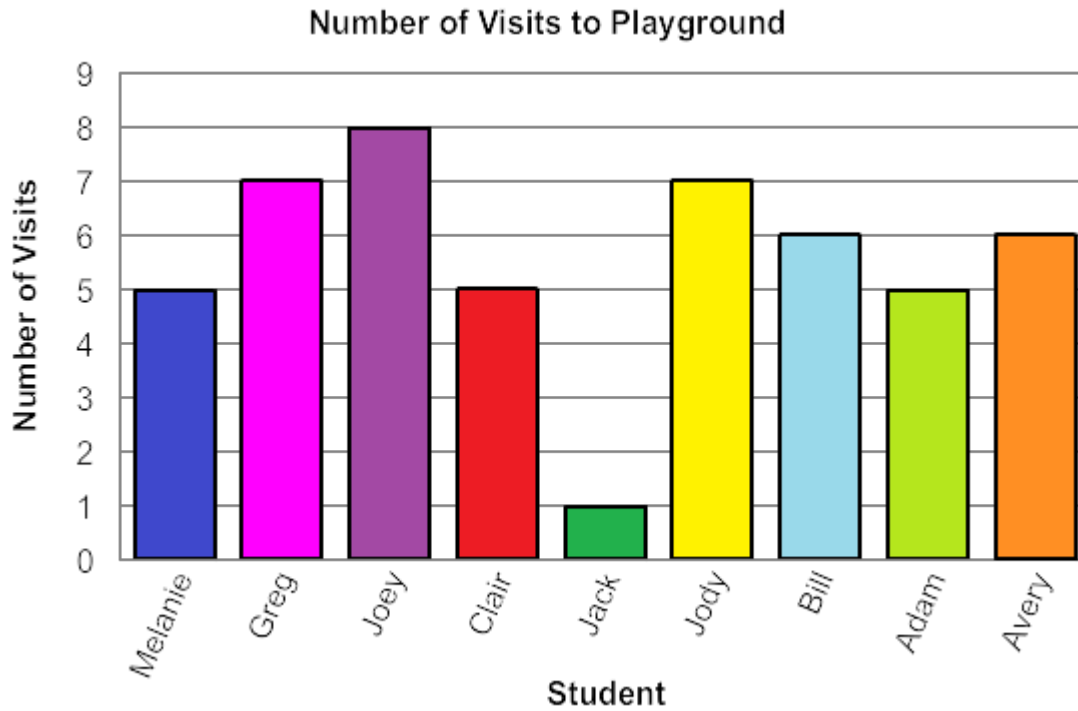
12.



- 50
- 43
- 45
- 44

Look at the given data representing number of visits to playground of each student in Miss Mary's class in a week. Find the range of the number of visits to the playground.

13.



- 6
- 7
- 5
- 2

The following table shows the number of books checked out from the library each day for a week. Find the range of the number of books checked out.

14.

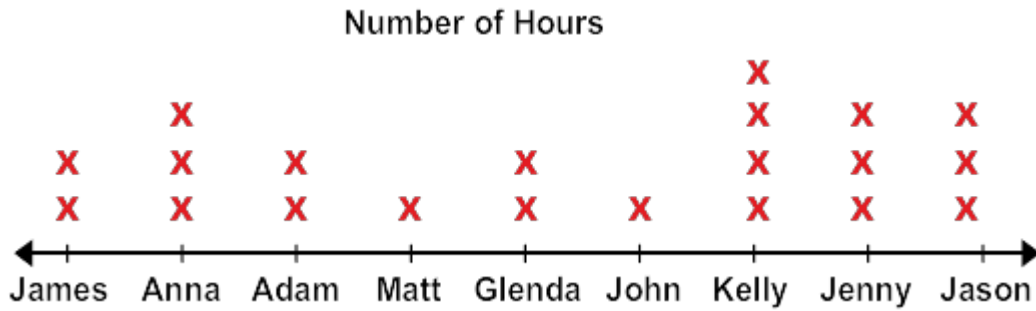
Books Checked Out from the Library

Day	Number of Books
Monday	10
Tuesday	14
Wednesday	23
Thursday	5
Friday	16
Saturday	26
Sunday	7

- 21
- 18
- 19
- 10

Some school students were asked how many hours a day they spent studying. Find the range of the number of hours spent on studying.

15.



- 1
- 2
- 3
- 4