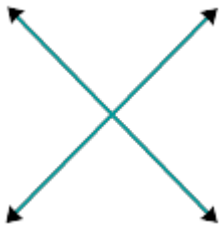


Parallel, Perpendicular, Intersecting Lines

Are the given lines parallel?

1.

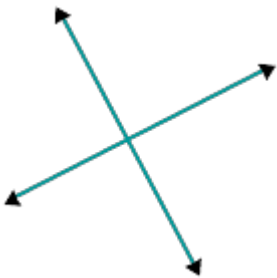


yes

no

Are the given lines perpendicular?

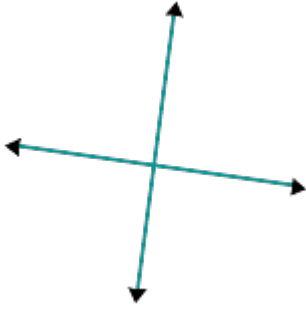
2.



yes

no

3.

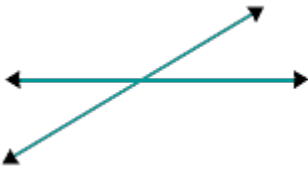


yes

no

Are the given lines intersecting?

4.



yes

no

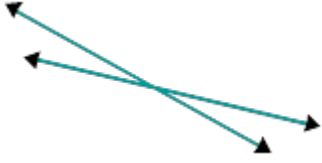
5.



yes

no

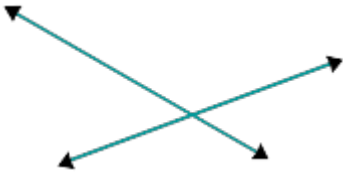
6.



yes

no

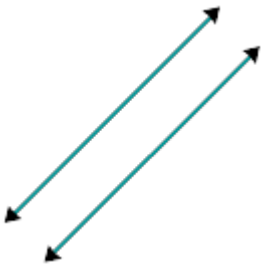
7.



yes

no

8.



yes

no

Are the given lines perpendicular?

9.

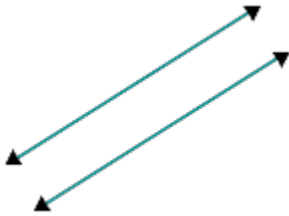


yes

no

Are the given lines parallel?

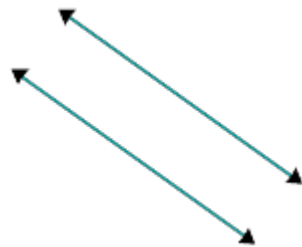
10.



yes

no

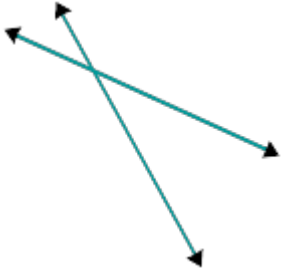
11.



yes

no

12.



yes

no

13.



yes

no

Are the given lines perpendicular?

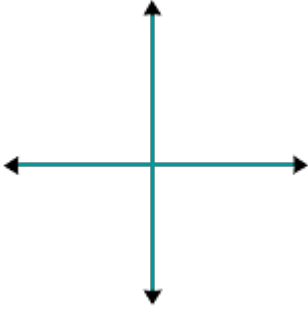
14.



yes

no

15.



yes

no