


Decimal Number Lines Part 1

Identify the decimal represented by the point z on the given number line.

1.



- 1.6
- 2.3
- 1.3
- 2.6

Identify the decimal represented by the point y on the given number line.

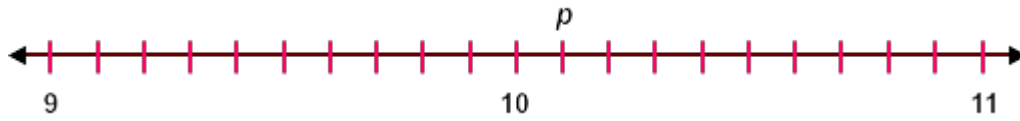
2.



- 5.6
- 6.0
- 6.4
- 5.4

Identify the decimal represented by the point p on the given number line.

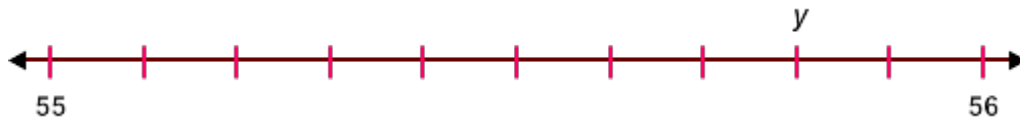
3.



- 10.0
- 10.2
- 10.1
- 11.1

Identify the decimal represented by the point y on the given number line.

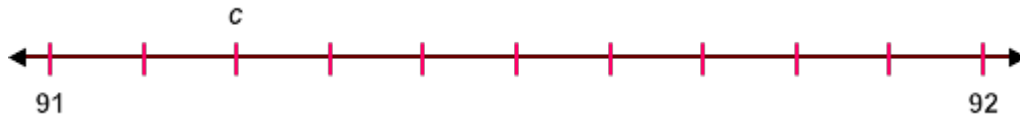
4.



- 55.6
- 55.8
- 56.2
- 56.8

Identify the decimal represented by the point c on the given number line.

5.



- 92.2
- 91.2
- 90.2
- 0.2

Identify the decimal represented by the point b on the given number line.

6.



- 6.0
- 6.1
- 6.2
- 7.1

Identify the decimal represented by the point c on the given number line.

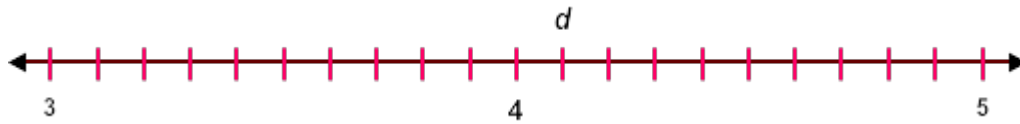
7.



- 2.5
- 2.6
- 2.8
- 2.7

Identify the decimal represented by the point d on the given number line.

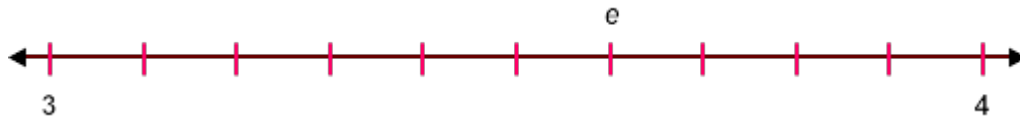
8.



- 4.0
- 4.1
- 4.2
- 4.3

Identify the decimal represented by the point *e* on the given number line.

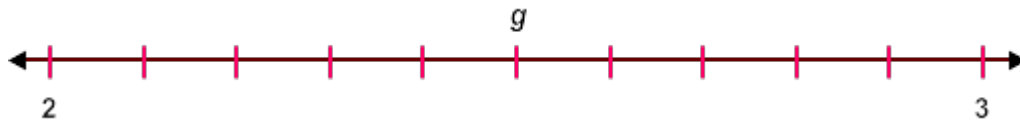
9.



- 3.4
- 3.5
- 3.6
- 3.7

Identify the decimal represented by the point *g* on the given number line.

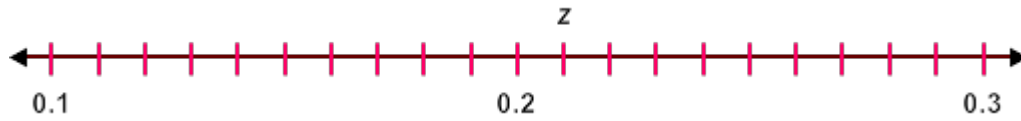
10.



- 2.3
- 2.4
- 2.5
- 2.6

Identify the decimal represented by the point z on the given number line.

11.



- 0.2
- 0.3
- 0.21
- 0.22

Identify the decimal represented by the point k on the given number line.

12.



- 0.6
- 6.0
- 0.06
- 0.16

Identify the decimal represented by the point j on the given number line.

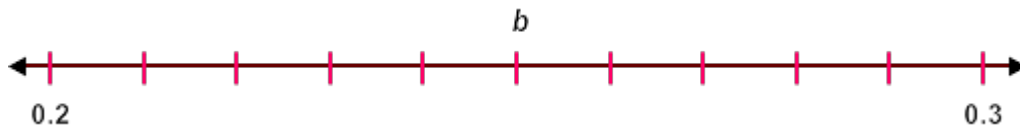
13.



- 0.13
- 0.23
- 1.3
- 0.03

Identify the decimal represented by the point b on the given number line.

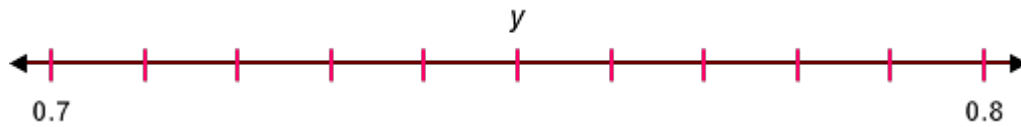
14.



- 0.35
- 1.25
- 0.25
- 0.15

Identify the decimal represented by the point y on the given number line.

15.



- 1.75
- 0.75
- 0.25
- 0.78