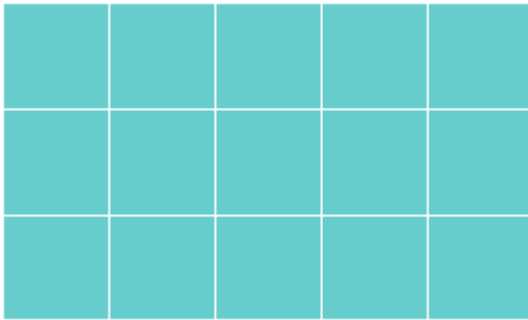


## Area of Rectangles by Tiling

---

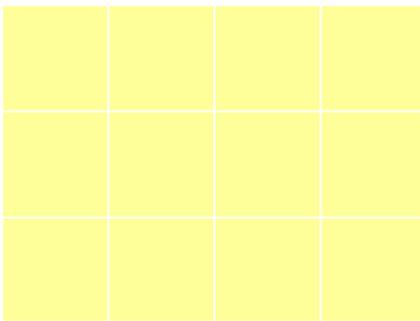
The given rectangle is made out of unit squares. Find out the area of the rectangle.

1.



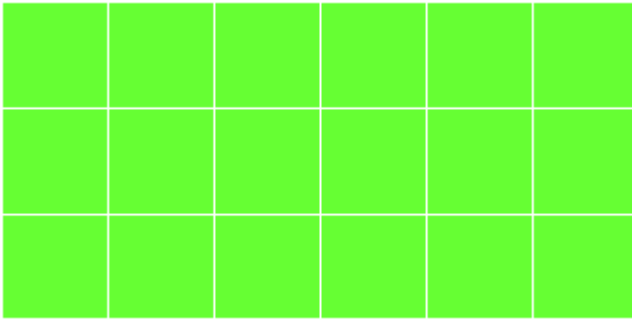
- 18 square units       10 square units  
 15 square units       19 square units

2.



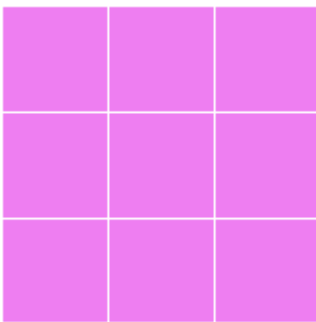
- 12 square units       15 square units  
 18 square units       19 square units

3.




- 11 square units
- 12 square units
- 19 square units
- 18 square units

4.




- 8 square units
- 6 square units
- 9 square units
- 5 square units

5.



- 20 square units
- 16 square units
- 10 square units
- 14 square units

6.



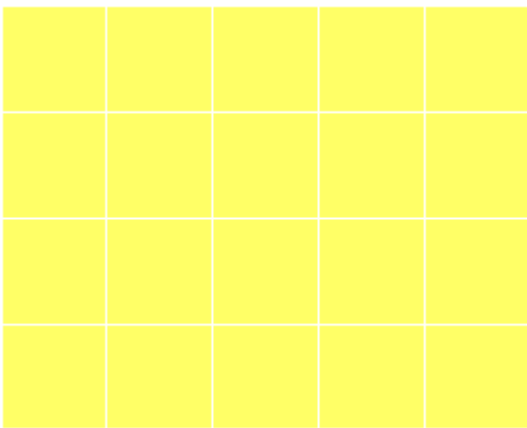
22 square units

25 square units

30 square units

27 square units

7.



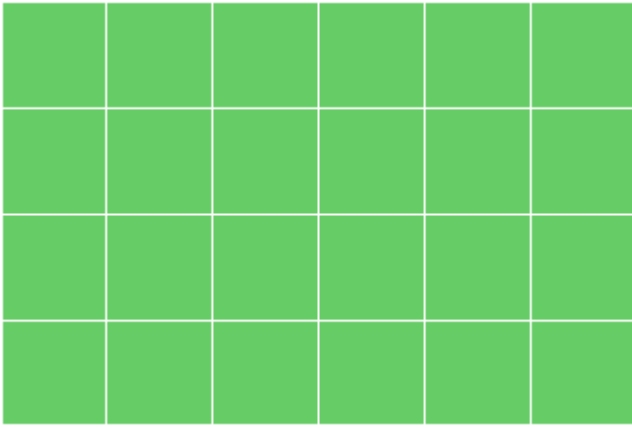
24 square units

29 square units

20 square units

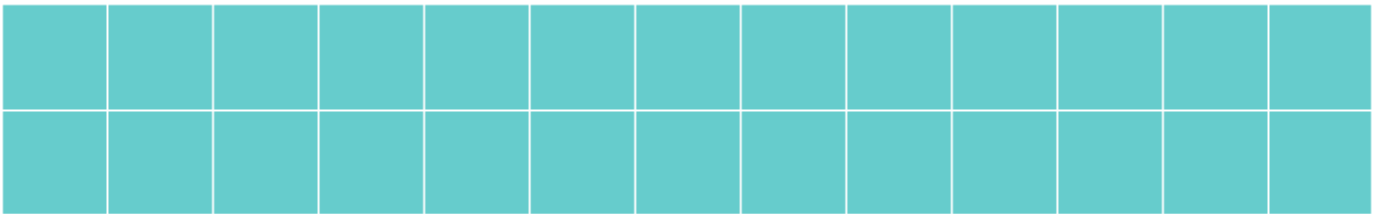
28 square units

8.




- 20 square units
- 23 square units
- 26 square units
- 24 square units

9.



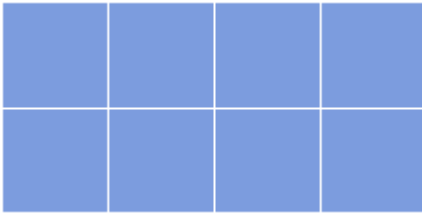
- 20 square units
- 26 square units
- 22 square units
- 14 square units

10.



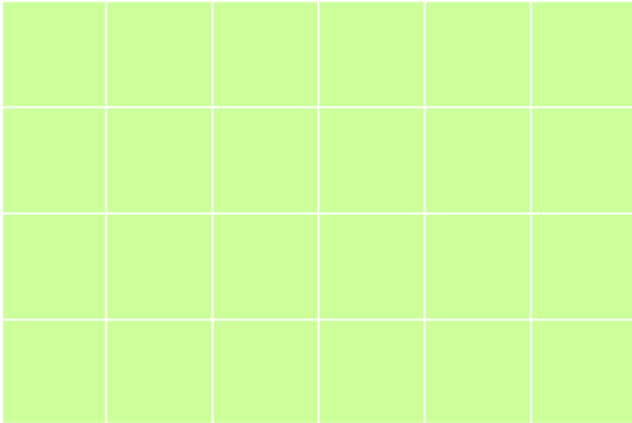
- 27 square units
- 20 square units
- 18 square units
- 25 square units

11.



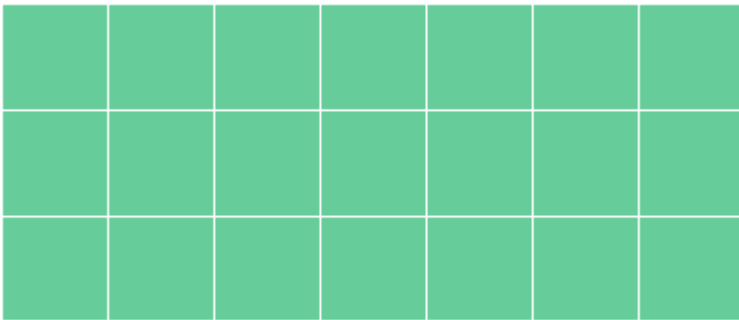
- 3 square units       4 square units  
 8 square units       9 square units

12.



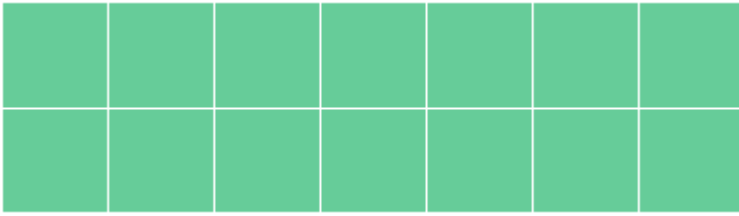
- 24 square units       10 square units  
 30 square units       28 square units

13.



- 15 square units       19 square units  
 21 square units       24 square units

14.




12 square units

10 square units

14 square units

18 square units

15.



20 square units

15 square units

12 square units

10 square units